



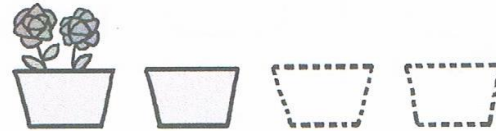
15 Completa.

| | | |
|-------------------------------|--|-----------------------------------|
| $0 + 0 = \underline{\quad}$ |  | $2 \times 0 = \underline{\quad}$ |
| $1 + 1 = \underline{\quad}$ | | $2 \times 1 = \underline{\quad}$ |
| $2 + 2 = \underline{\quad}$ | | $2 \times 2 = \underline{\quad}$ |
| $3 + 3 = \underline{\quad}$ | | $2 \times 3 = \underline{\quad}$ |
| $4 + 4 = \underline{\quad}$ | | $2 \times 4 = \underline{\quad}$ |
| $5 + 5 = \underline{\quad}$ | | $2 \times 5 = \underline{\quad}$ |
| $6 + 6 = \underline{\quad}$ | | $2 \times 6 = \underline{\quad}$ |
| $7 + 7 = \underline{\quad}$ | | $2 \times 7 = \underline{\quad}$ |
| $8 + 8 = \underline{\quad}$ | | $2 \times 8 = \underline{\quad}$ |
| $9 + 9 = \underline{\quad}$ | | $2 \times 9 = \underline{\quad}$ |
| $10 + 10 = \underline{\quad}$ | | $2 \times 10 = \underline{\quad}$ |


16 Dibuja y calcula.




$4 \times 2 = \square$




$2 \times 4 = \square$




$6 \times \square = \square$



$\square \times 6 = \square$



$3 \times \square = \square$



$\square \times 3 = \square$

17 Une las operaciones con sus resultados.

| | | | |
|------------------|--|----|-------------|
| $2 \times 4 + 1$ | | 11 | $1 + 1$ |
| 2×1 | | 9 | $8 + 3$ |
| $1 \times 8 + 3$ | | 2 | $4 + 4 + 1$ |

18 Multiplica.

| | | | | |
|---|---|---|--|---|
| $\begin{array}{r} 5 \\ \times 2 \\ \hline \end{array}$ <input style="width: 100px; height: 20px;" type="text"/> | $\begin{array}{r} 4 \\ \times 2 \\ \hline \end{array}$ <input style="width: 100px; height: 20px;" type="text"/> | $\begin{array}{r} 7 \\ \times 2 \\ \hline \end{array}$ <input style="width: 100px; height: 20px;" type="text"/> | $\begin{array}{r} 8 \\ \times 2 \\ \hline \end{array}$ <input style="width: 100px; height: 20px;" type="text"/> | $\begin{array}{r} 3 \\ \times 2 \\ \hline \end{array}$ <input style="width: 100px; height: 20px;" type="text"/> |
| $\begin{array}{r} 2 \\ \times 2 \\ \hline \end{array}$ <input style="width: 100px; height: 20px;" type="text"/> | $\begin{array}{r} 6 \\ \times 2 \\ \hline \end{array}$ <input style="width: 100px; height: 20px;" type="text"/> | $\begin{array}{r} 9 \\ \times 2 \\ \hline \end{array}$ <input style="width: 100px; height: 20px;" type="text"/> | $\begin{array}{r} 10 \\ \times 2 \\ \hline \end{array}$ <input style="width: 100px; height: 20px;" type="text"/> | $\begin{array}{r} 0 \\ \times 2 \\ \hline \end{array}$ <input style="width: 100px; height: 20px;" type="text"/> |

19 Completa.

| | | |
|--------------------------|--------------------------|--------------------------|
| $2 \times \text{○} = 8$ | $2 \times \text{○} = 12$ | $2 \times \text{○} = 0$ |
| $2 \times \text{○} = 10$ | $2 \times \text{○} = 2$ | $2 \times \text{○} = 16$ |
| $2 \times \text{○} = 4$ | $2 \times \text{○} = 6$ | $2 \times \text{○} = 14$ |

20 Completa la tabla.

| | | | | | | | | | | |
|------------|---|---|---|---|---|---|---|---|---|---|
| | 9 | 4 | 7 | 5 | 0 | 1 | 8 | 2 | 3 | 6 |
| $\times 2$ | | | | | | | | | | |